

$$\text{Hard Hat} + \text{Hard Hat} = 8$$





$$\text{Diamond Sign} - \text{Hard Hat} = 5$$

$$\text{Hard Hat} + \text{STOP Sign} + \text{Diamond Sign} = 20$$

$$\text{STOP Sign} + \text{Diamond Sign} - \text{Traffic Cone} = 8$$

$$\text{STOP Sign} + \text{Traffic Cone} + \text{Traffic Cone} - \text{Hard Hat} = \square$$

$$\text{STOP Sign} + \text{STOP Sign} - 2 - \text{Traffic Cone} = \square$$

			
<input type="text"/>	<input type="text"/>	<input type="text"/>	<input type="text"/>