

$$\text{hammer} + \text{hammer} = 10$$





$$\text{hammer} + \text{saw} + \text{hammer} = 18$$

$$\text{saw} - \text{shovel} + \text{saw} = 13$$

$$\text{shovel} + \text{saw} - \text{hammer} - \text{wrench} = 5$$

$$\text{wrench} + \text{saw} - \text{shovel} - \text{shovel} = \square$$

$$\text{shovel} + \text{saw} - \text{hammer} + 2 = \square$$

			
<input type="text"/>	<input type="text"/>	<input type="text"/>	<input type="text"/>