

$$\triangle + \triangle = 18$$





$$\text{cone} + \triangle = 14$$

$$\text{helmet} + \triangle - \text{cone} = 7$$

$$\text{shovel} + \triangle - \text{cone} - \text{helmet} = 2$$

$$\text{cone} - \text{shovel} - \text{helmet} + \triangle = \square$$

$$\triangle + \text{shovel} - \text{helmet} - 2 = \square$$

| | | | |
|---|---|---|--|
|  |  |  |  |
| <input type="text"/> | <input type="text"/> | <input type="text"/> | <input type="text"/> |